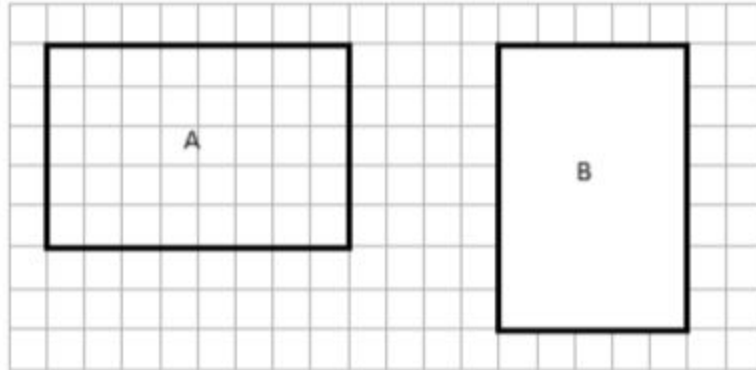


Name: \_\_\_\_\_

Date: \_\_\_\_\_

**Math Homework 1/18-1/24**  
**M3L1 Perimeter & Area**

1. Find the perimeter and area of rectangles A and B.




a. P= \_\_\_\_\_


A= \_\_\_\_\_

b. P= \_\_\_\_\_

A= \_\_\_\_\_

2. Determine the perimeter and area of each rectangle

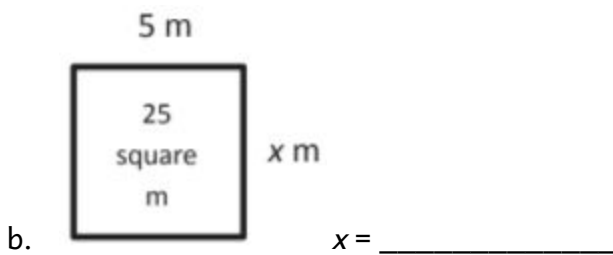
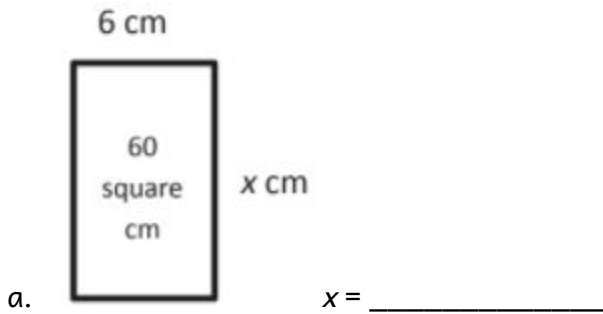
a.  P= \_\_\_\_\_  
A= \_\_\_\_\_

b.  P= \_\_\_\_\_  
A= \_\_\_\_\_

Name: \_\_\_\_\_

Date: \_\_\_\_\_

3. Given the rectangle's area, find the unknown side length



4. Given the rectangle's perimeter, find the unknown side length

