


Name: _____

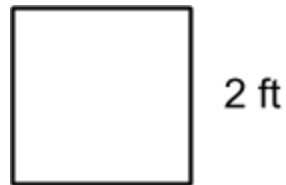
Date: _____

Math Homework 1/11-1/17
M3L1 Finding Perimeter

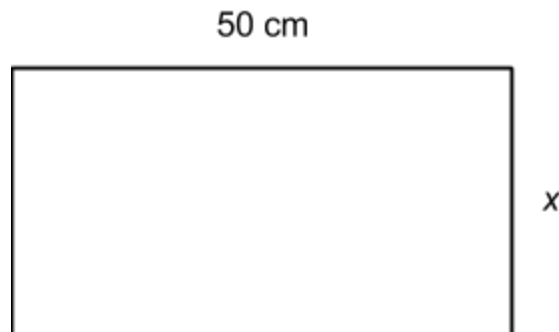
1. Find the perimeter



2. Find the perimeter of this square



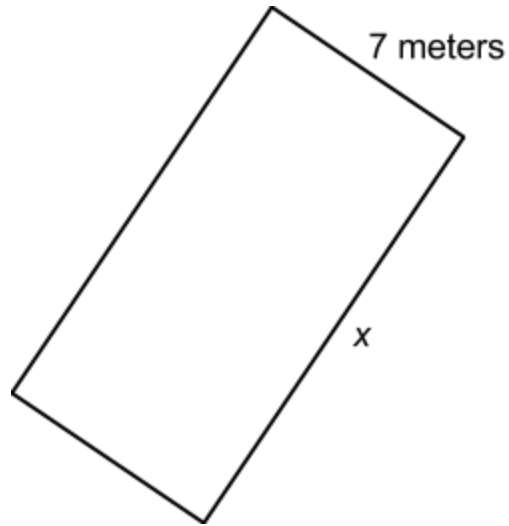
3. Find the length of the missing side if the perimeter is 160 cm



Name: _____

Date: _____

4. Find the length of the missing side if the perimeter is 34 meters



5. Jessica is getting new carpet in her room. Her dad measured the perimeter of the room and it was 32 feet around. When he ordered her new carpet he knew that one of the sides of her room was 9 feet long, but he could not remember the length of the other side of the room. What is the length of the other side? Draw a model of Jessica's room & solve.